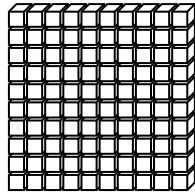


# Hundreds, tens and units

Write the number of cubes in each set.

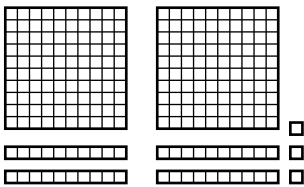
100 cubes



10 cubes

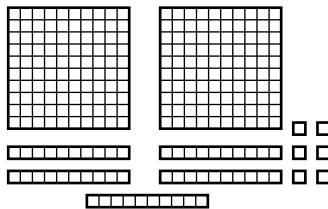


1.



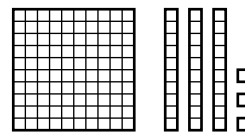
.....

2.



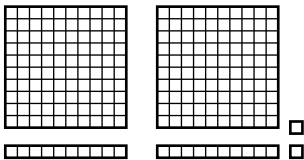
.....

3.



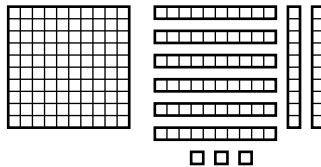
.....

4.




.....

5.



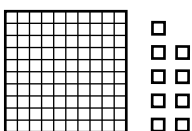
.....

6.




.....

7.



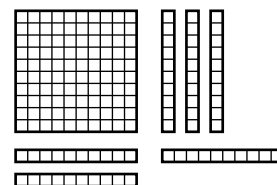
.....

8.



.....

9.



.....



I can talk about the digits in a number

