
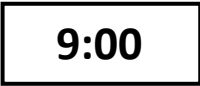



Consolidation work 5 - First Level *

1. How many corners does a triangle have?
2. Find a quarter of 8
3. How many 50p in £1?
4. 9 plus 6 =
5. What is 20 minus 5?
6. _____ + 7 = 15
7. 14 - _____ = 10
8. How many edges has a square got?
9. There are 15 sheep in a field. A farmer puts them equally into 5 pens. How many sheep are in each pen?
10. Complete the pattern: 0, 5, _____, 15, _____, 25, 30, _____
11. Colour in the tallest rectangle: 
12. Double 9
13. What is half of 16?
14. Find the total of 8 and 7.
15. What is the time in words? 
16. How many days are in a week?
17. What is the name of this shape? 
18. There are 8 cats in a garden. Each cat has a collar with 2 bells on it. How many bells are there?
19. What month is after December?
20. How many sides does a diamond have?